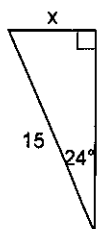


6.2 Using Trig. to Find Missing Sides Homework

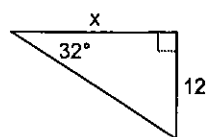
Date _____ Period _____

Find the missing side. Round to the nearest tenth.

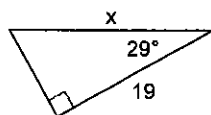
1)



2)



3)



4)

